

SAMPLE MAKEorBREAK

Numeracy Game Questions

Castle Score

MAKEorBREAK?TM

Got the answer?
Be the first to stand with your group's flag.

Correct?
The group... castle,
The group...
castles wins. Enjoy:

1	21	41
2	22	42
3	23	43
4	24	44
5	25	45
6	26	46
7	27	47
8	28	48
9	29	49
10	30	50
11	31	51
12	32	52
13	33	53
14	34	54
15	35	55
16	36	56
17	37	57
18	38	58
19	39	59
20	40	60

SAMPLE NUMERACY GAME QUESTIONS

Question 1:

How many squares would there be in the fourth pattern?

Answer:
9

Score

Answer

MAKEorBREAK?

Question 4:

Predict the missing number in the pattern:
22, 37, 52, _____

Answer:
67

Score

Answer

MAKEorBREAK?

Question 7:

$36 + \square = 52$

Answer:
16

Score

Answer

MAKEorBREAK?

Question 14:

If another row of triangles was added below the last blue row, identify what colour they would be and the amount of them.

Answer:
4 orange triangles would be added.

Score

Answer

MAKEorBREAK?

Question 29:

What comes next in this sequence?

Answer:
Purple circle

Score

Answer

MAKEorBREAK?

SAMPLE MAKEorBREAK

Numeracy Game Questions

Score

Answer

Question 1:
 $6 + 4 = ?$

Answer:
10

MAKEorBREAK?

Score

Answer

Question 2:
Round 1467 to the nearest 10

Answer:
1470

MAKEorBREAK?

Score

Answer

Question 21:
There are 40 sheep on the farm. 10 of the sheep are black. The rest of the sheep are white. What percentage of the sheep are black?

Answer:
25%

MAKEorBREAK?

Score

Answer

Question 21:
There are 40 sheep on the farm. 10 of the sheep are black. The rest of the sheep are white. What percentage of the sheep are black?


Answer:
25%

MAKEorBREAK?

Score

Answer

Question 6:
Identify what fraction of these shapes has three or less angles.



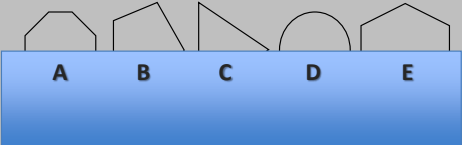
Answer:
3/7

MAKEorBREAK?

Score

Answer

Question 19:
Under the piece of paper are the rest of these symmetrical shapes. What is Shape C called?



Answer:
Triangle

MAKEorBREAK?

SAMPLE MAKEorBREAK

Numeracy Game Questions

Question 26:

How many lines of symmetry does this Octagon have?



Answer:
8 lines of symmetry

MAKEorBREAK?

Score

Answer

Question 33:

Name this shape;



Answer:
Triangular prism






MAKEorBREAK?

Score

Answer

Question 39:

If I started in square B3 and I moved 3 squares down and 2 squares right what square would I finish in?

	A	B	C	D	E
1					
2					
3					
4					
5					
6					

Answer:
D6

Score

Answer

Question 46:

If I was facing north and I made a right angle turn to the left, what direction would I now be facing?

Answer:
West

MAKEorBREAK?

Score

Answer